

**Mother Teresa Mission Higher Secondary School**  
**Holiday Homework (2019-2020)**  
**Subject- Mathematics**  
**Class- II Sec-**

Name- \_\_\_\_\_

**I- Think and answer-**

- a) Is your eraser is thicker than your box? \_\_\_\_\_
- b) When zero is taken away from a number the answer is always \_\_\_\_\_
- c) Write odd numbers between 31 to 40 \_\_\_\_\_
- d) Who is in weight you or your mom? \_\_\_\_\_
- e) Write the next number in the given sequence- 83, 80, 77, 74  
\_\_\_\_\_

**II- Fill in the blank boxes-**

- a)  $846 = \square + 40 + 6$
- b)  $6 \times \square = 36$
- c)  $10 + \square = 19$
- d)  $7 \times 3 = \square$
- e)  $40 + \square = 60$
- f)  $\square \times 5 = 30$

**III- Arrange the numbers in both in ascending and descending order-**

- a)      184              156              213              183              199  
A→      \_\_\_\_\_              \_\_\_\_\_              \_\_\_\_\_              \_\_\_\_\_              \_\_\_\_\_  
D→      \_\_\_\_\_              \_\_\_\_\_              \_\_\_\_\_              \_\_\_\_\_              \_\_\_\_\_
- b)      875              157              469              218              312  
A→      \_\_\_\_\_              \_\_\_\_\_              \_\_\_\_\_              \_\_\_\_\_              \_\_\_\_\_  
D→      \_\_\_\_\_              \_\_\_\_\_              \_\_\_\_\_              \_\_\_\_\_              \_\_\_\_\_
- c)      516              718              283              385              999  
A→      \_\_\_\_\_              \_\_\_\_\_              \_\_\_\_\_              \_\_\_\_\_              \_\_\_\_\_  
D→      \_\_\_\_\_              \_\_\_\_\_              \_\_\_\_\_              \_\_\_\_\_              \_\_\_\_\_
- d)      315              618              715              217              614  
A→      \_\_\_\_\_              \_\_\_\_\_              \_\_\_\_\_              \_\_\_\_\_              \_\_\_\_\_  
D→      \_\_\_\_\_              \_\_\_\_\_              \_\_\_\_\_              \_\_\_\_\_              \_\_\_\_\_

**IV- Fill in the blanks-**

- a) The place value of 9 in 189 is \_\_\_\_\_.
- b) The expanded form of 213 is \_\_\_\_\_.
- c) The face value of 0 in 201 is \_\_\_\_\_.
- d) The compact form of 6 tens + 3 ones is \_\_\_\_\_.
- e) The difference of 40 and 30 is \_\_\_\_\_.
- f) The product of 9 and 7 is \_\_\_\_\_.

**V- Solve the puzzle by using number 3, 4, 5.**

- a)  $4 + 4 + \underline{\hspace{2cm}} = 12$   
 b)  $4 + \underline{\hspace{1cm}} - 3 = 6$   
 c)  $\underline{\hspace{1cm}} \times 4 + 1 = 17$   
 d)  $5 \times \underline{\hspace{1cm}} - 4 = 16$   
 e)  $4 \times \underline{\hspace{1cm}} \times 3 = 60$

**VI- Write in tens-**

- a)  $40 = \underline{\hspace{2cm}}$                       b)  $60 = \underline{\hspace{2cm}}$                       c)  $90 = \underline{\hspace{2cm}}$

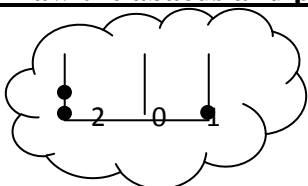
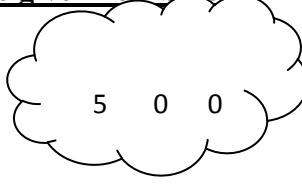
**VII- Crossword puzzle-**

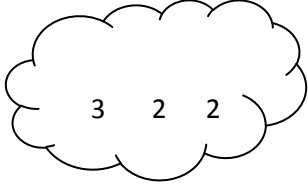
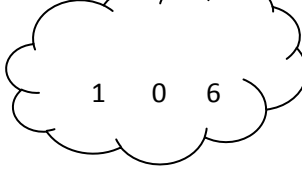
Fill in the blanks of each creess word puzzle to make the multiplication equations true.

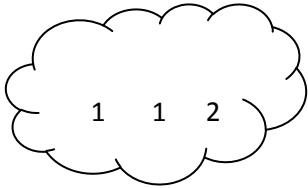
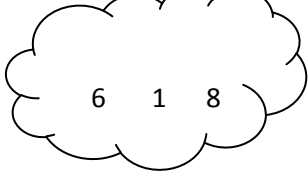
2	×		=	6
				×
	×	1	=	
			=	
	×	24	=	

	×	5	=	30
	×			
8	×	4	=	

**IX- Draw the abacus and put the dots to show the given numbers:-**

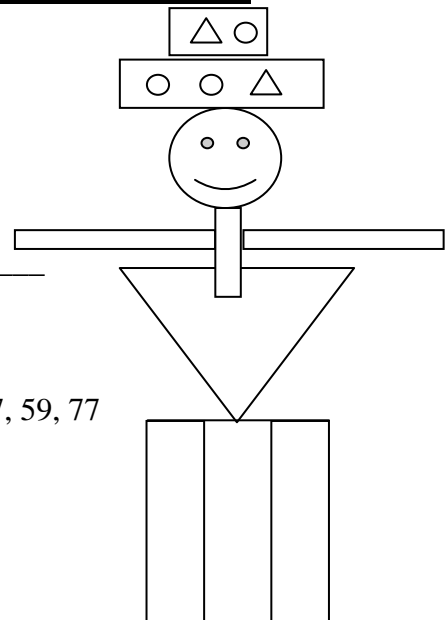
a)                       b) 

c)                       d) 

e)                       f) 

**IX- Look at the picture, Identify the shapes and fill in the blanks (colour it)-**

My hat has \_\_\_\_\_ circles \_\_\_\_\_ rectangles  
 \_\_\_\_\_ squares \_\_\_\_\_ triangles  
 My face has \_\_\_\_\_ circles \_\_\_\_\_ triangles  
 \_\_\_\_\_ squares. My arms are \_\_\_\_\_  
 My feet are \_\_\_\_\_



Maths Book (Interactive Maths) – Do Page no.30, 31, 40, 57, 59, 77

87, 88, 89, 90, 91, 93, 95, 101 (1 June to 12 June)

Maths speed (Pgs. 8 to 20)

Book (13 June to 25 June)

- ❖ Learn tables 2 to 12
- ❖ Learn counting and number names from 1 to 999